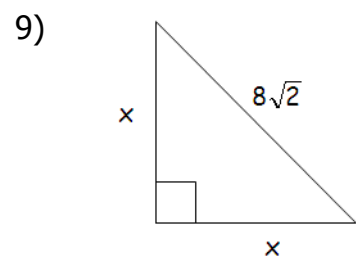
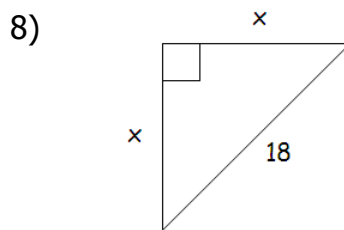
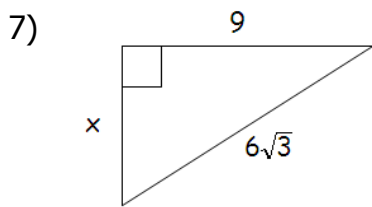
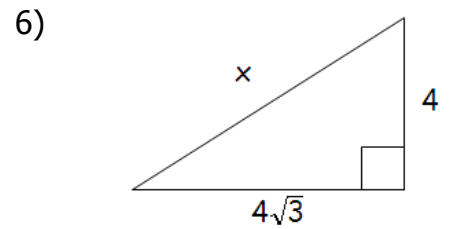
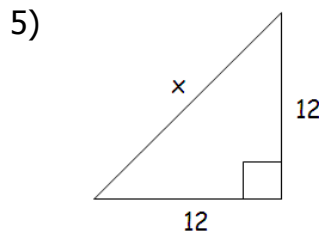
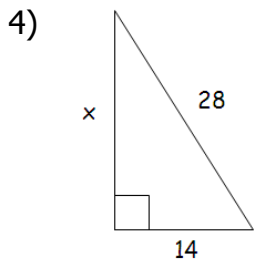
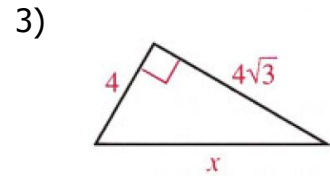
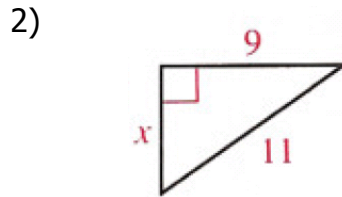
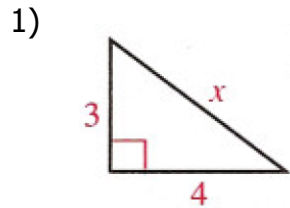


Pythagorean Theorem Practice Problems

Set up and solve. **Show all work in your notebook.** If the radical does not simplify to a perfect square, break down the radical like we did in the beginning of the unit.

Pythagorean Theorem:



Do the following side lengths make right triangles? Show work to prove your answers.

10. 18, 24, 30

11. 13, 10, 7

12. 60, 61, 11